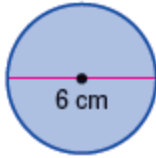


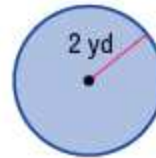
Lesson 4 Extra Practice**Area of Circles**

Determine the area of each circle. Use 3.14 for π . Round to the nearest tenth. You must show your work and you may use a calculator.

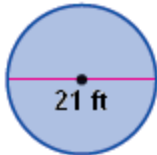
1.



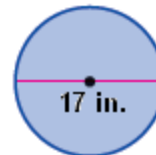
2.



3.



4.



5. diameter = 2.3 m

6. diameter = 82 ft

7. radius = 68 cm

8. radius = 3.4 ft.

Use $\frac{22}{7}$ for π for questions 9 and 10

9. diameter = $1\frac{1}{4}$ ft

10. diameter = $15\frac{1}{2}$ m