


Name _____

Date _____

All Operations Crossnumber Math Puzzle 1



This puzzle requires you to complete all the basic operations presented to you.

Across

1. $124 + 287$
4. $405 + 325$
7. 29×4
10. $713 + 171$
12. $342 + 178$
14. $7 + 5$
15. $612 \div 6$
17. $5 + 55$
18. $50 + 67$
20. $27 + 91$
23. $223 + 87$
25. $199 + 214$
27. $425 - 15$
29. $9 + 4$
30. $375 + 126$
32. $15 + 6$
33. $26 + 79$
34. 50×8


Down

2. $570 \div 5$
3. $5 + 6$
5. $63 + 282$
6. $507 + 274$
8. $4800 \div 8$
9. $714 - 14$
11. $587 + 234$
13. $139 + 129$
15. $27 - 10$
16. $633 \div 3$
19. $193 - 90$
21. $201 - 97$
22. $281 - 40$
23. $1200 \div 4$
24. $291 - 90$
26. $78 + 53$
28. $960 \div 8$
30. $12 + 43$
31. $11 + 3$

Name _____

Date _____

All Operations Crossnumber Math Puzzle 2



This puzzle requires you to complete all the basic operations presented to you.

Across

1. $189 + 433$
4. $305 + 375$
7. $612 / 6$
10. $215 + 206$
12. $445 + 305$
14. $5 + 6$
15. $570 / 5$
17. $11 + 3$
18. $29 + 184$
20. 29×4
23. $302 + 198$
25. $39 + 294$
27. $124 + 287$
29. $7 + 5$
30. $324 + 187$
32. $17 + 13$
33. $26 + 79$
34. $528 - 18$


Down

2. $633 / 3$
3. $13 + 7$
5. $719 + 168$
6. $627 + 214$
8. $291 - 90$
9. $250 + 54$
11. $27 + 185$
13. $405 + 111$
15. $9 + 4$
16. $425 - 15$
19. $193 - 90$
21. $201 - 97$
22. $35 + 296$
23. $375 + 126$
24. 305×2
26. $15 + 306$
28. $156 - 26$
30. $12 + 43$
31. $23 - 8$

Name _____

Date _____

All Operations Crossnumber Math Puzzle 3



This puzzle requires you to complete all the basic operations presented to you.

Across

1. $125 + 42$
4. $608 + 382$
7. $612 \div 6$
10. $223 + 87$
12. $29 + 90$
14. $5 + 6$
15. 29×4
17. $142 \div 2$
18. $126 + 286$
20. $50 + 67$
23. $173 + 441$
25. $137 + 36$
27. $27 + 91$
29. $9 + 4$
30. $407 - 6$
32. $13 + 7$
33. $201 - 97$
34. 50×8


Down

2. 305×2
3. $25 + 45$
5. $570 + 401$
6. $364 + 167$
8. $291 - 90$
9. $727 + 164$
11. $570 \div 5$
13. $145 + 32$
15. $8 + 4$
16. $167 + 444$
19. $193 - 90$
21. $73 + 68$
22. $567 + 244$
23. $4800 \div 8$
24. $163 + 117$
26. $407 + 324$
28. $960 \div 8$
30. $19 + 25$
31. $11 + 3$

Name _____

Date _____

All Operations Crossnumber Math Puzzle 4



This puzzle requires you to complete all the basic operations presented to you.

Across

1. $43 + 83$
4. $248 + 562$
7. $918 / 9$
10. $264 + 47$
12. $342 + 178$
14. $8 + 3$
15. 29×4
17. $25 + 45$
18. $257 + 155$
20. $79 + 38$
23. $28 + 78$
25. $771 + 142$
27. $27 + 91$
29. $6 + 7$
30. $281 - 40$
32. $4 + 16$
33. $26 + 79$
34. 100×4

Down

2. $633 / 3$
3. $5 + 55$
5. $83 + 82$
6. $364 + 167$
8. $307 - 106$
9. $6300 / 7$
11. $1026 / 9$
13. $157 + 120$
15. $8 + 4$
16. 305×2
19. $193 - 90$
21. $138 + 23$
22. $355 + 136$
23. $201 - 97$
24. $109 + 171$
26. $78 + 53$
28. $960 / 8$
30. $43 - 18$
31. $5 + 9$