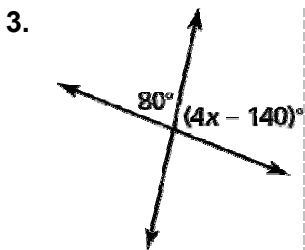
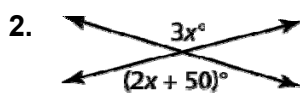
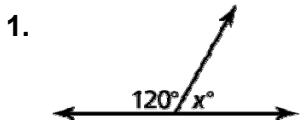


7.1 Puzzle Time

What Runs Around All Day And Lies Under The Bed With Its Tongue Hanging Out?

Write the letter of each answer in the box containing the exercise number.

Tell whether the angles are *adjacent* or *vertical*.



Answers

N. 29

K. vertical

A. 160

S. 60


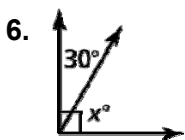
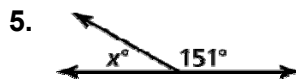
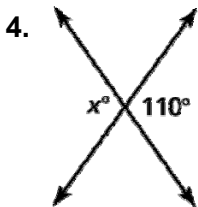
E. adjacent

R. 135

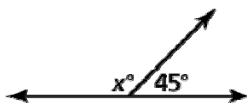
E. adjacent

A. 110

Find the value of x .



8. A road intersects another road at an angle of 45° . Find the value of x .



7		6	5	3	4	2	1	8
---	--	---	---	---	---	---	---	---