	<b>KENDRIYA VIDYALAYA, NARIM EDU, MADURAI-02</b>		
	<b>SUMMATIVE ASSESSMENT – I</b>		
	<b>2015-16</b>		
	<b>CLASS: III SEC:</b>		
<b>SUBJECT: EVS</b>		<b>TIME: 2 HOURS</b>	<b>DATE:</b>
<b>NAME OF THE STUDENT:</b>		<b>ROLL NO:</b>	
<b>COMP</b>	<b>OBSERVATION</b>	<b>IDENTIFICATION</b>	<b>DISCOVERING OF FACTS</b>
<b>GRADE</b>			
			<b>OVER ALL GRADE</b>


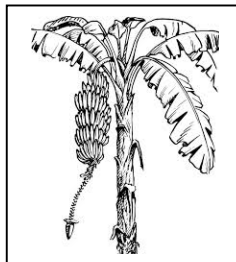
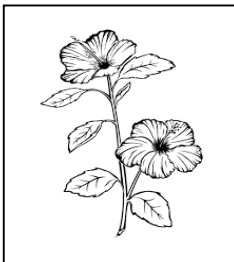
### OBSERVATION

Observe the picture and tick

1. Tick the flower that grows in the water.







2. Tick the climber.






3. Encircle the bird which move their neck front and back.



althy



5. Tick the bird which do not fly.



6. Tick the person who builds the house.

(a) Doctor      (b) Mason      (c) Teacher

7. Encircle the bird which has curved sharp beak to cut the nuts.

(a) Parrot      (b) Sparrow      (c) Cuckoo

8. Name any two medicinal plants \_\_\_\_\_, \_\_\_\_\_.

9. Name any two birds fly high in the sky \_\_\_\_\_, \_\_\_\_\_.

10. Name any two animals which give birth to young ones \_\_\_\_\_, \_\_\_\_\_

11. Name any two food items which old people eat \_\_\_\_\_, \_\_\_\_\_

12. (a) Draw the beaks of parrot, wood pecker and sparrow.

--	--	--

(b) People living in different places eat different food items .why?

---

---

---

---

**IDENTIFICATION**

13. Tick the bird which lives in water.(swan/myna/eagle)

14. Encircle the transport that can carry more number of passengers. (train/bus/car)

15. we get paper from \_\_\_\_\_ tree.(mango/bamboo/peepal)

16. \_\_\_\_\_ is the snow house.(Igloo/caravan/tent)

17. we must \_\_\_\_\_ water for future (save/waste)

18. FILL IN THE BLANKS:

(a) In dance the action of hands show some feeling. They are called \_\_\_\_\_.

(b) Some people cannot hear. They are called \_\_\_\_\_.

(c) We eat food to get \_\_\_\_\_.

(d) \_\_\_\_\_ is our national bird.

19. Give two examples for (a) compound leaves \_\_\_\_\_, \_\_\_\_\_.

(b) plants grow in the desert \_\_\_\_\_, \_\_\_\_\_.

20. Why do we need house?

---

---

---

21. How do birds fly?

---

---

---


22. Why should we drink pure water?

---

---

---

23.(a) Draw an ambulance.



(b) Write any four works done in hospital.

---

---

---

---

**DISCOVERING FACTS**

**24. Water is used for many purposes because it \_\_\_\_\_**

**(dissolves many things / is cheap)**

**25. Plants give out \_\_\_\_\_ while preparing food (Carbondioxed / Oxygen)**

**26. We eat food \_\_\_\_\_ ( to live / for taste)**

**27. Whis form of water is in steam?**

---

**28. Choose the correct answer:**

a) Ducks have \_\_\_\_\_ feet (webbed/long/short)

b) One who repairs car and scooters \_\_\_\_\_ (mechanic/plumber/electrician)

**29. Find the odd one and circle:**

(a) Fish, duck, monkey, crocodile.

(b) Bathing, combing, swimming, washing.

(c ) Rice, wheat, ragi, mango

(d) Milk, juice, soup, cake

**30. Write four methods of cooking.**

---

---

---

**31 Name four fuels.**

---

---

**32.Match it:**

- (a)Pucca house      --ostrich
- (b)Post man        --chappathi
- (c)Wheat            --bungalow
- (d)The largest bird --post office


**33.Why do we cook food?**

---

---

---

**34.(a) If you go on a journey by sea, what would you choose to travel? Draw it.**



**(b)Name the vehicles.**

**Run on  
petrol/diesel:** \_\_\_\_\_

\_\_\_\_\_

**Run without  
petrol/diesel** \_\_\_\_\_

\_\_\_\_\_