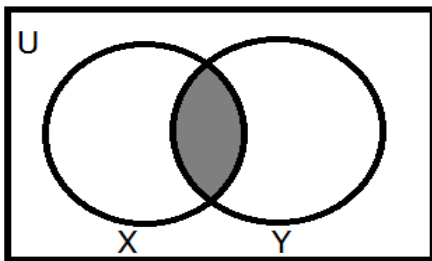


De La Salle Santiago Zobel School
First Term A.Y. 2013 - 2014
Mathematics Grade 6 Module 1
Seatwork #4

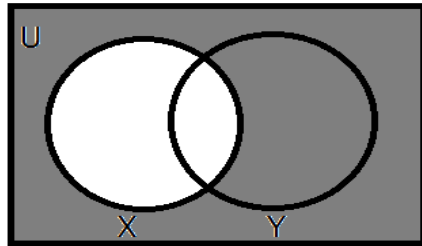
Name: _____ Section: _____
Teacher: _____ Date: _____

I. Identify what set operation is shown by each Venn diagram.

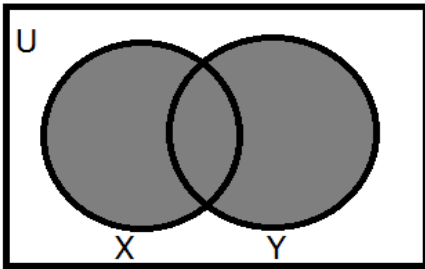
1) _____



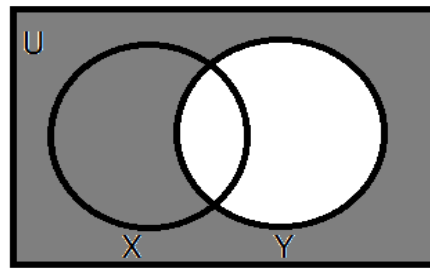
2) _____



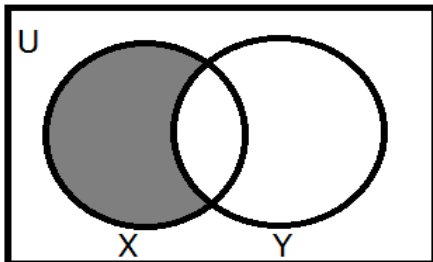
3) _____



4) _____



5) _____



6) _____

