

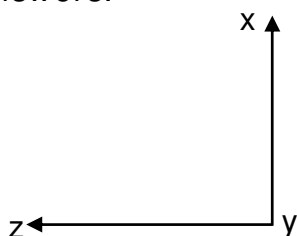
Name _____

Date _____

Measure Angles with a Protractor - Matching Worksheet

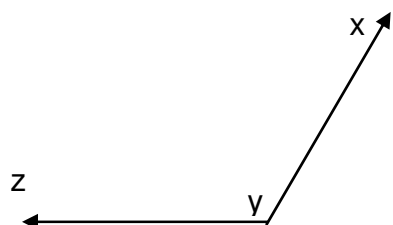
Use the protractor to measure the angles and match them to their right answers.

1.



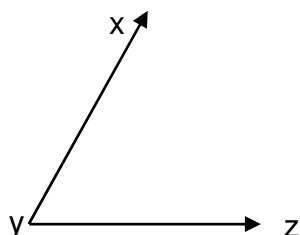
a. 65°

2.



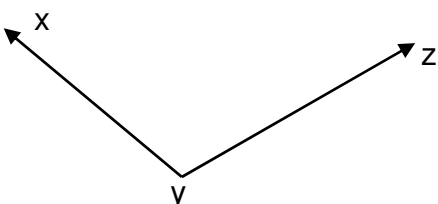
b. 90°

3.



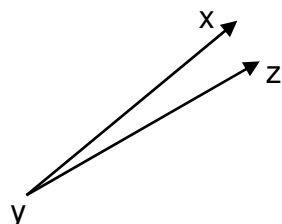
c. 10°

4.



d. 120°

5.



e. 110°

