

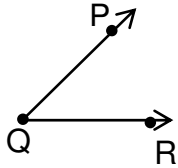
Name \_\_\_\_\_

Date \_\_\_\_\_

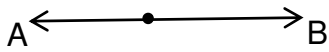
## Segments, Rays, Lines - Independent Practice Worksheet

Name what you see in each problem as a line, ray, point, or line segment.

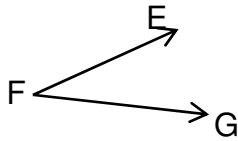
1.



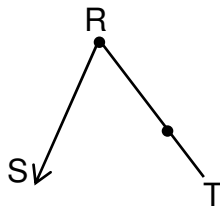
2.



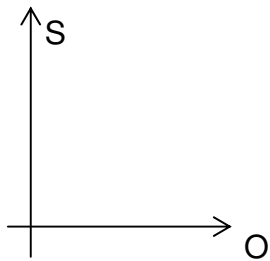
3.



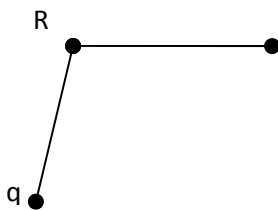
4.



5.



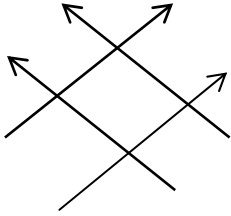
6.



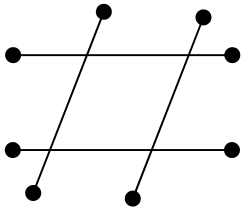
Name \_\_\_\_\_

Date \_\_\_\_\_

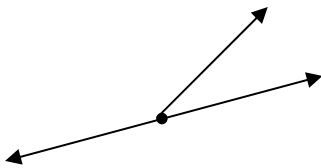
7.



8.



9.



10

