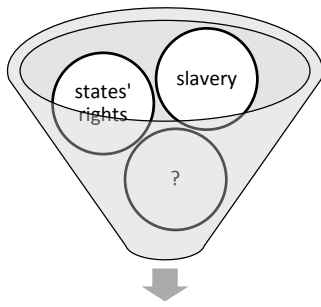


Texas History Review Sheet—2nd Semester Exam

Civil War

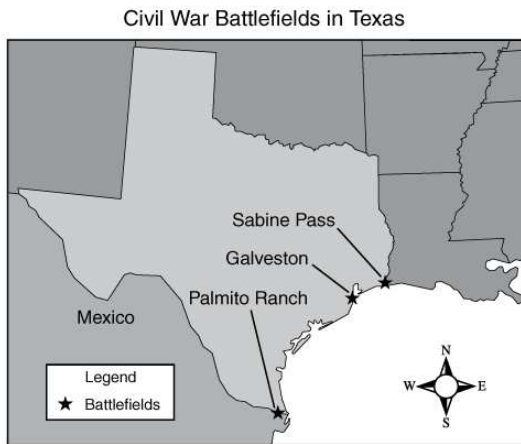
Which reason for Texas' involvement is left out?



Reasons Texas became involved
in the Civil War

To secede from the Union and set up another government would cause war. If you go to war with the United States, you will never conquer her, as she has the money and men. If she does not whip you by guns, powder, and steel, she will starve you to death. It will take the flower of the country—the young men. —Governor Sam Houston

How did Sam Houston feel about secession? →



What does the map above tell us about Texas and the Civil War?

What is the significance of 1861 in relation to the Civil War?

Smith General Co. Receipt	
Dozen eggs...	6.00
Pound of butter...	6.25
Quart of milk...	10.00
Pound of coffee...	12.00
TOTAL...	34.25

During the Civil War, a Texas soldier earned \$18.00 a month.

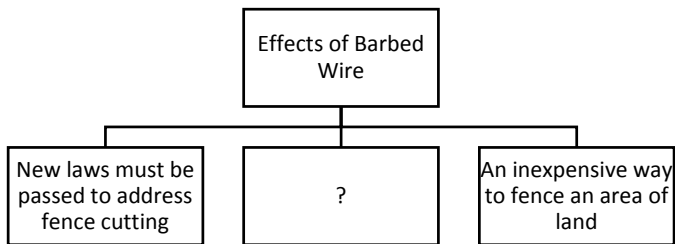
Describe the economic effects of the Civil War on Texans.

Label the following: economic, social, political

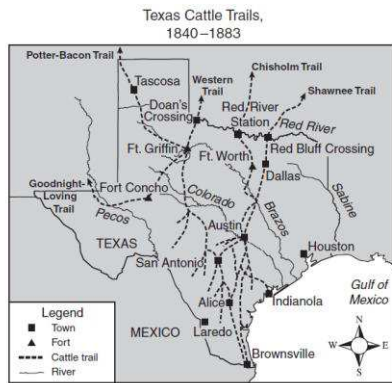
		
1. Texas writes a new constitution	2. Rebuilding after the Civil War	3. African Americans gain freedom

What was Juneteenth?

Constitution of 1876---

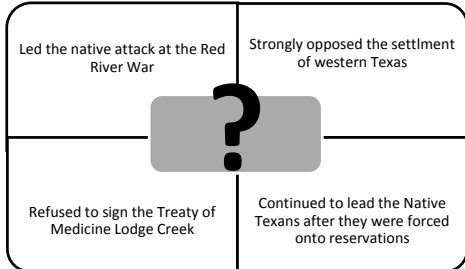


Identify the places a cattle drive could cross the Red River.



- Travel time reduced
- Western migration encouraged
- Open range closed
- Native Americans forced off their land

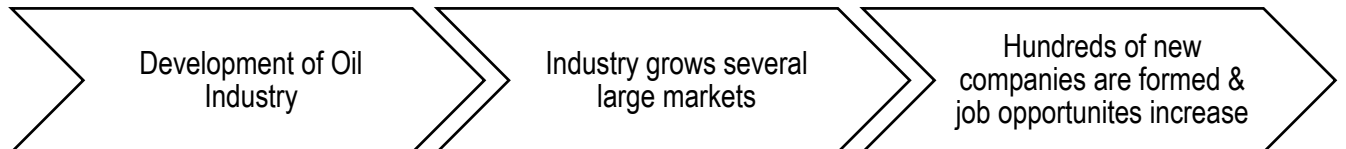
What technological advancement resulted in these effects?



What would complete the diagram on the left?



What would complete this diagram?



What will happen next?

Reform Movements

What was a common goal for these reform movements?



What type of reform is pictured here?
←



What type of reform is pictured here?
←

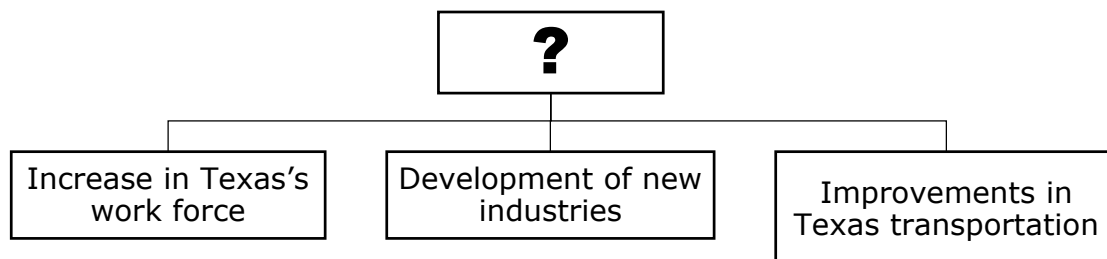
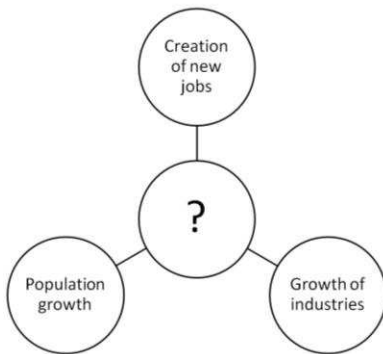
- | |
|--|
| ? |
| <ul style="list-style-type: none"> • Supported farmers • wanted monopolies to be illegal • wanted railroad reform |

Early 20th Century

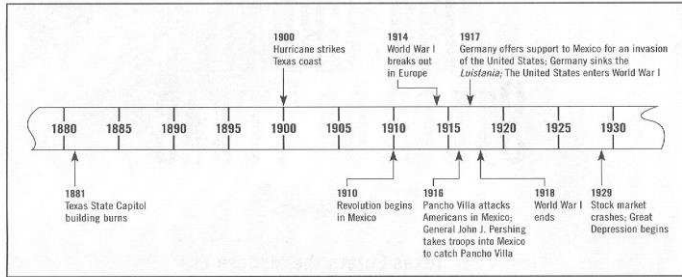
Spindletop:

How did World War I affect the production of goods and services in Texas?

- | |
|--|
| <p>What is a good title for the following?</p> <p>_____</p> <ul style="list-style-type: none"> • Women voted in elections. • Women organized a lobby to influence state legislation. • Women pushed to abolish child labor and asked for better laws regarding education, healthcare, and other social reforms. |
|--|



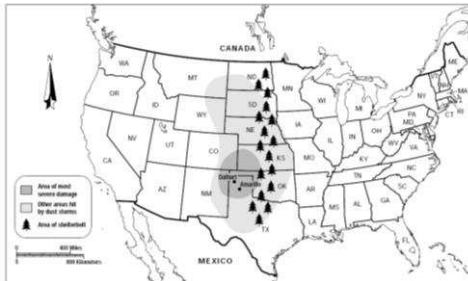
What is a good title for this timeline?



Great Depression

How did the Dust Bowl affect the social development of Texas?

Use the picture below to answer the following question.



How does the climate and geography of Texas explain the location of the Dust Bowl?

World War 2

Use the diagram below to answer the following question.

IMPACTS OF WORLD WAR II

Which is **economic**?

Which is **social**?

Which is **political**?

- | | |
|----------|--|
| A | <ul style="list-style-type: none"> Created financial growth and ended the Great Depression |
| B | <ul style="list-style-type: none"> Newcomers and soldiers shared new ideas and help make cities more sophisticated |
| C | <ul style="list-style-type: none"> Women, Mexican Americans, & African Americans who served during the war began to gain equal rights from the government |



*NASA's Manned Spacecraft Center is in Houston. How did NASA impact Texas?

Use the stimulus below to answer the following question.



?

- ★ Received the Distinguished Service Medal for outstanding service
- ★ Colonel of the Women's Army Corp
- ★ Identified 239 types of army positions for women
- ★ Managed 100,000 women in posts around the world

Civil Rights and Government



Henry B. Gonzalez

- First Mexican Texan elected to _____
- Set record for longest filibuster in _____
- First Mexican Texan in _____
- Civil _____




Barbara Jordan said, "***We the people***. I felt for many years that George Washington and Alexander Hamilton just left me out by mistake. But by the process of amendment, interpretation and court decision, I have finally been included in ***We the people***. My faith in the constitution is whole, it is complete, it is total."

***What impact did Barbara Jordan have on Texas?**

Define Republicanism:


How do these men relate to "republicanism?"



Rick Perry

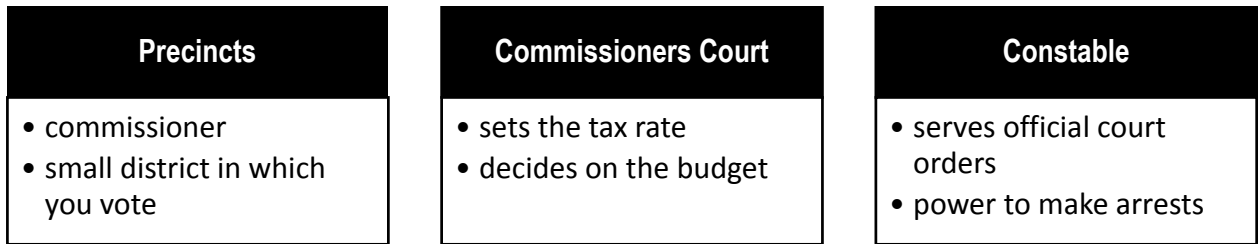


Julian Castro



Wallace Jefferson

Use the diagram below to answer the following question.



Which government follows the structure above?

Texas Constitution of 1876

Sec. 14. Every bill which shall have passed both houses of the Legislature shall be presented to the governor for his approval. If he approves he shall sign it;; but if he disapproves it, he shall return it with his objections, to the house I which it originated, the house shall enter the objections at large upon its journal, and proceed to reconsider it.

Which principle of government is reflected in the excerpt above?

Explain why.

Sources of Revenue for Texas Government and Local Governments

1. Sales Tax
2. Fees
- 3.

Use the diagrams below to answer the following question.

1876 Texas Constitution

SEC. 8.

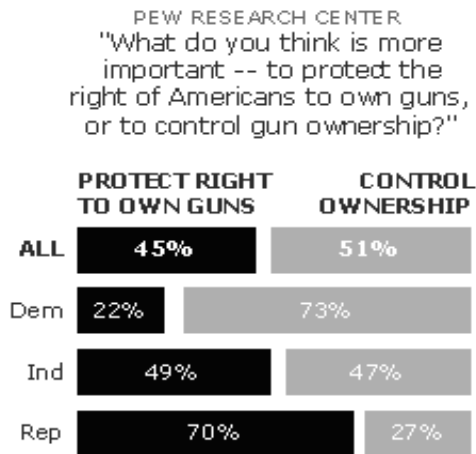
Every person shall be at liberty to speak, write or publish his opinions on any subject, ... and no law shall ever be passed curtailing the liberty of speech or of the press.

U.S. Constitution

Amendment I

Congress shall make no law respecting an establishment of religion, or prohibiting the free exercise thereof; or abridging the freedom of speech, or of the press; or the right of the people peaceably to assemble, and to petition the Government for a redress of grievances.

Which principle of government is reflected in the excerpts above?



1/9-13/13

pollingreport.com

What conclusion can be drawn from the graph above?

