



INTERNATIONAL INDIAN SCHOOL JEDDAH MATHEMATICS

12. Handling Data Worksheet

Class: III


Name : _____ Sec : _____

Date : _____

Roll No : _____

1. Meera's father took Meera and 5 friends on a fishing trip. They recorded the number of fish they caught on the pictograph below.

Fishing Trip Results








Dad	
Meera	
Rakhi	
Emily	
Sana	
Seema	
Rose	

 - 2 fish

- Who caught the maximum number of fish ? _____
- Who caught the least number of fish ? _____
- Who caught more fish Emily or Rose ? _____. How many more ? _____
- How many fish did Rakhi catch ? _____
- How many more fish did Seema catch than Rose ? _____
- How many fish they caught in all ? _____

2. Several students were helping to decorate the school halls by drawing pictures to hang up . The students recorded the pictures drawn in the pictograph below ?

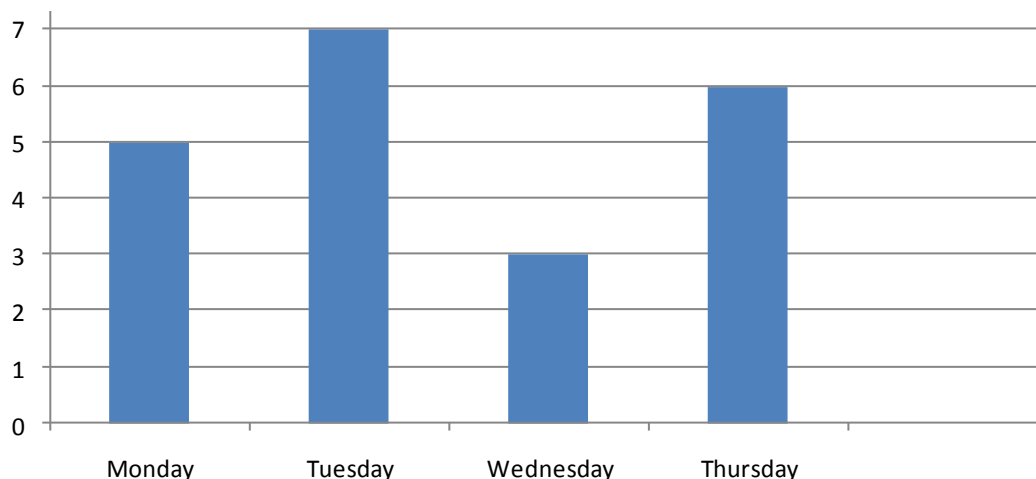
Number of pictures drawn

Arun	
Manu	
Ashik	
Ahmed	
Jabir	
Salman	
Rohan	

 -1 picture drawn

- Who drew the maximum number of pictures ? _____
- Who drew six pictures ? _____
- Did Salman or Arun draw more pictures? _____. How many more ? _____
- How many pictures did Ahmed draw ? _____
- How many students drew the same number of pictures ? _____. Name them? _____ , _____
- How many pictures are hanged up ? _____

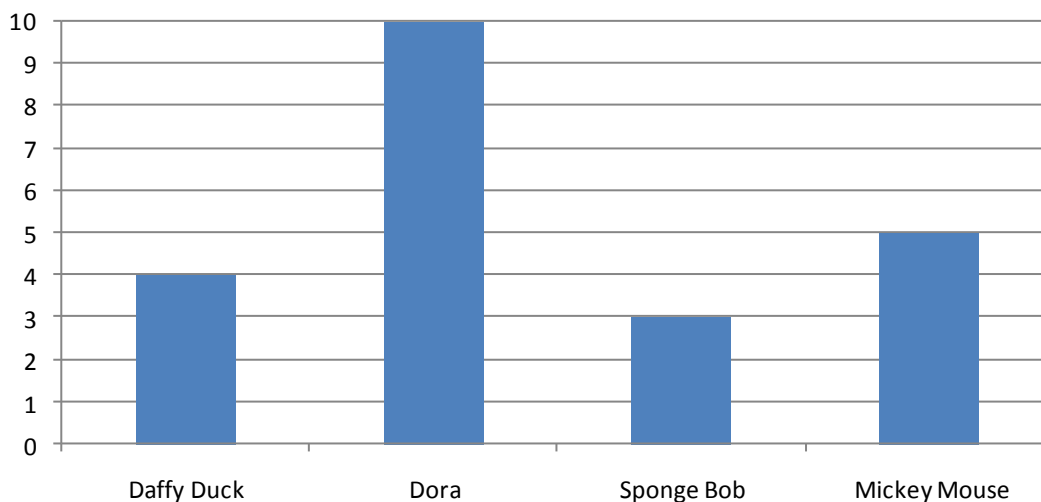
3. A farmer has some hens . This graph shows how many eggs they lay . Use the graph to answer the questions ?



- How many eggs did the hens lay on Monday ? _____
- How many eggs in all did they lay on Tuesday and Wednesday ? _____
- When did they lay the maximum number of eggs ? _____
- How many more eggs did they lay on Monday than on Wednesday ? _____

4. A toy company asked its customers which cartoon character was their favourite . They recorded the results in the bar graph below . Use it to answer the questions ?

Favourite cartoon characters



- Which is the most favourite cartoon character ? _____
- How many more people like Dora than Micky mouse ? _____
- Which character did exactly 10 people say was their favourite ? _____
- What is the difference in the number of people who liked Daffy duck and the number who liked Sponge bob ? _____
- Did fewer people like Sponge bob or Micky mouse ? _____
- Which cartoon character was liked by least number of people ? _____