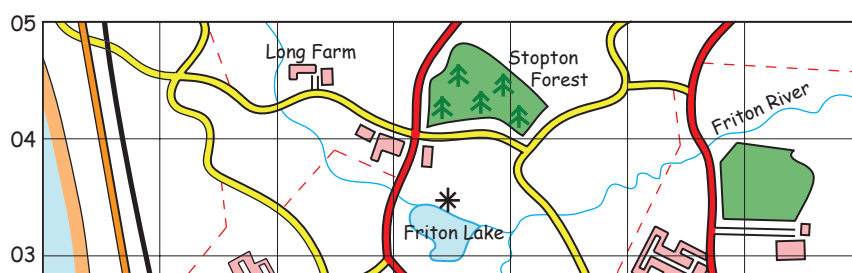


Name: _____ Subject: Year 3 Geography
 Date: _____ Unit: Investigating an area

Grid References

Look at the map below to see how to give a 6 digit grid reference:

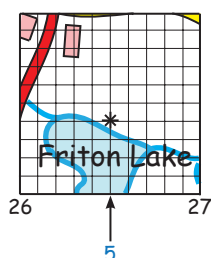


Worksheet Preview

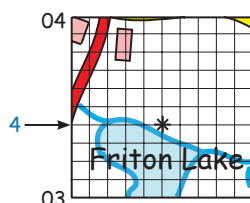
Please log in or sign up to download these quality worksheets designed by teachers and publishers

Firstly, imagine each square on the grid is divided into 10 equal bits. Look at the star on the map. Read the number going across (26). Now read the number of tenths (5)

e.g.



Now do the same with the number going up. (03) Now read the number of tenths (4)

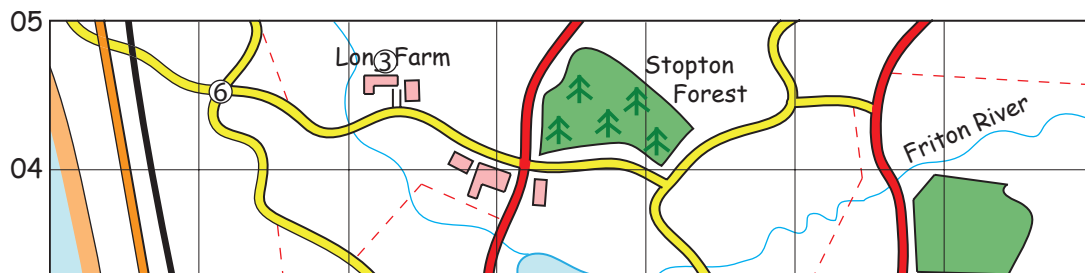


Put these two numbers together and your grid reference should read:
265034

Name: _____ Subject: Year 3 Geography
Date: _____ Unit: Investigating an area

Map Work

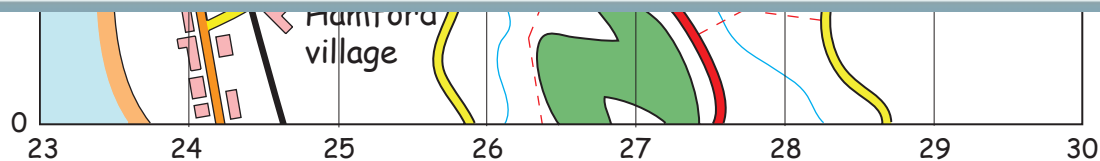
Look at the map below and answer the following questions:





Worksheet Preview

Please log in or sign up to download these quality worksheets designed by teachers and publishers



Give the six figure reference for the following circles:

1) Give the grid reference for ① _____

2) Give the grid reference for ② _____

3) Give the grid reference for ③ _____

4) Give the grid reference for ④ _____

5) Give the grid reference for ⑤ _____

6) Give the grid reference for ⑥ _____