





Name _____ Date _____

Independent Practice 2: Pictographs

Species of Bird	Number Seen
Robin	
Cardinal	
Pigeon	
Blue Jay	

Each picture = 2 birds

Every year people across the United States participate in the Great Backyard Bird Count. Pretend you counted birds and your numbers are shown in the pictograph.

1. How many birds did you see?
2. Which species did you see the most?
3. Which species did you see the least?
4. How many cardinals and blue jays total did you see?
5. Name all the bird species in order from least to most seen.
6. What is the ratio of robins to blue jays?