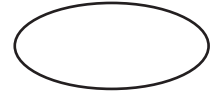



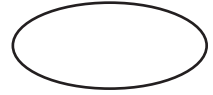

Time - Standard Form

Write each time in standard form:

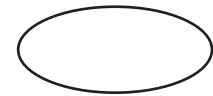

1) Quarter past three



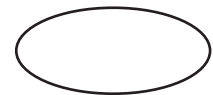

2) Quarter to nine



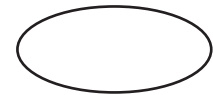

3) Half past eight



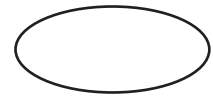

4) Quarter past twelve



5) Quarter past seven



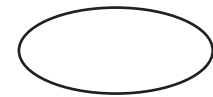
6) Half past five



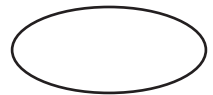

7) Quarter to five




8) Half past eleven



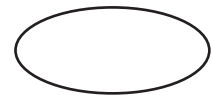

9) Quarter past nine



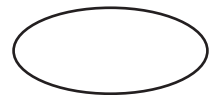

10) Quarter to four



11) Half past six




12) Quarter to two




Answer key

Write each time in standard form:


1) Quarter past three

**3:15**


2) Quarter to nine

**8:45**


3) Half past eight

**8:30**

4) Quarter past twelve

**12:15**

5) Quarter past seven

**7:15**


6) Half past five

**5:30**


7) Quarter to five

**4:45**


8) Half past eleven

**11:30**


9) Quarter past nine

**9:15**


10) Quarter to four

**3:45**

11) Half past six

**6:30**

12) Quarter to two

**1:45**