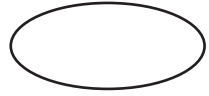



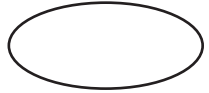

**Time - Standard Form**

Write each time in standard form:

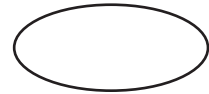

1) Half past eight




2) Quarter to three




3) Quarter to twelve



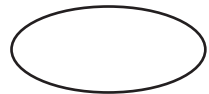

4) Quarter to eight




5) Half past seven




6) Quarter to one



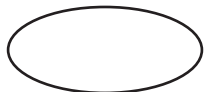

7) Quarter past four




8) Half past ten




9) Quarter past six




10) Quarter to eleven



11) Quarter past one




12) Quarter to six




**Answer key**

Write each time in standard form:


1) Half past eight

**8:30**


2) Quarter to three

**2:45**


3) Quarter to twelve

**11:45**

4) Quarter to eight

**9:45**

5) Half past seven

**7:30**


6) Quarter to one

**12:45**


7) Quarter past four

**4:15**


8) Half past ten

**10:30**


9) Quarter past six

**6:15**


10) Quarter to eleven

**10:45**

11) Quarter past one

**1:15**

12) Quarter to six

**5:45**