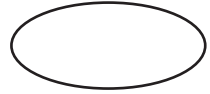



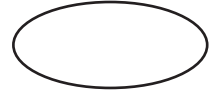

**Time - Standard Form**

Write each time in standard form:

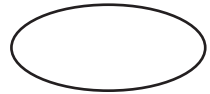

1) Twenty to nine



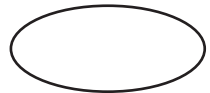

2) Five to two



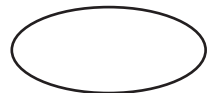

3) Ten past twelve



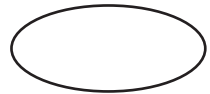
4) Half past seven




5) Ten to five




6) Twelve past eleven




7) Twenty two to three




8) Quarter past ten



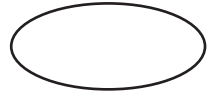

9) Twenty six past five



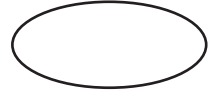

10) Twenty nine to ten



11) Quarter to six



12) Eighteen to four



**Answer key**

Write each time in standard form:

- |     |                      |   |       |
|-----|----------------------|---|-------|
| 1)  | Twenty to nine       | → | 8:40  |
| 2)  | Five to two          | → | 1:55  |
| 3)  | Ten past twelve      | → | 12:10 |
| 4)  | Half past seven      | → | 7:30  |
| 5)  | Ten to five          | → | 4:50  |
| 6)  | Twelve past eleven   | → | 11:12 |
| 7)  | Twenty two to three  | → | 2:38  |
| 8)  | Quarter past ten     | → | 10:15 |
| 9)  | Twenty six past five | → | 5:26  |
| 10) | Twenty nine to ten   | → | 9:31  |
| 11) | Quarter to six       | → | 5:45  |
| 12) | Eighteen to four     | → | 3:42  |